

3.35 - Fracture and Fatigue
 Problem Set 4 - Solutions
 November 4, 2003

Problem 4

a) $1 \text{ psi} = 6.895 \times 10^3 \text{ Pa}$ (stress scale) $(1 \text{ ksi} = 10^3 \text{ psi})$

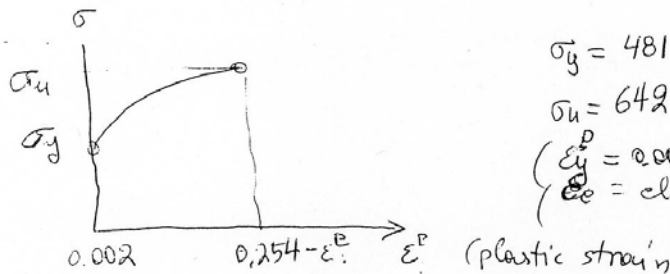
$T_R = \frac{9}{5}T_C + 491.7$ } (Temperature scales)
 $T = 273 + T_C$ }

$T_C = -30^\circ\text{C} \Rightarrow T_R = -24^\circ\text{R}$

Fig. 1 \Rightarrow
 $\sigma_y^*(T, \dot{\epsilon}) = 4.55 \times 10^3 (T_R \ln(10^8/\dot{\epsilon}))^{-0.431} \times 10^3 \text{ psi}$

$\left. \begin{array}{l} \dot{\epsilon} = 10^{-2} \text{ s}^{-1} \\ T_R = -24^\circ\text{R} \end{array} \right\} \Rightarrow \sigma_y^* = 1830 \text{ MPa}$

$\left. \begin{array}{l} \dot{\epsilon} = 5 \text{ s}^{-1} \\ T_R = -24^\circ\text{R} \end{array} \right\} \Rightarrow \sigma_y^* = 2000 \text{ MPa}$



$\sigma_y = 481 \text{ MPa}$
 $\sigma_u = 642 \text{ MPa}$
 $\left(\begin{array}{l} \epsilon_y^p = 0.002 \text{ (definition)} \\ \epsilon_e = \text{elastic strain} = \sigma/E \end{array} \right)$

↑ engineering definition of yield strain

Try a power law fit:

$\left(\begin{array}{l} \epsilon = \epsilon_e^p + \frac{\sigma}{E} \text{ (total strain)} \\ = \epsilon_e + \epsilon_p \end{array} \right)$

$\frac{\epsilon}{\epsilon_y^p} = \left(\frac{\sigma}{\sigma_y} \right)^\eta$

with $0.254 = \epsilon$ and $\sigma = 642 \text{ MPa}$
 and $E = 200 \text{ GPa}$

elastic strains:

$$\bar{\sigma} = 642 \text{ MPa} \Rightarrow \epsilon_{cl}^e = \frac{642}{200 \times 10^3} = 3.21 \times 10^{-3} = 0.0032$$

$$\bar{\sigma} = 481 \text{ MPa} \Rightarrow \epsilon_y^e = \frac{481}{200 \times 10^3} = 0.0024$$

plastic strains

$$\bar{\sigma}_y = 481 \Rightarrow \epsilon_y^p = 0.002$$

$$\bar{\sigma}_u = 642 \Rightarrow \epsilon_u^p = -0.0032 + 0.254 = 0.251$$

$$\Rightarrow \begin{cases} \alpha \approx 1.0 \\ \text{and } n \approx 16 > 10 \end{cases}$$

Use $n=10$ from Fig. 3

From Ritchie:

$$I_n \approx 4.5$$

$$g(n) = \tilde{\sigma}_{00}(n) \Big|_{\theta=0} \left[\frac{1-\nu^2}{I_n} \right]^{\frac{1}{n+1}} = \tilde{\sigma}_{yy}(n) \Big|_{\theta=0} \left[\frac{1-\nu^2}{I_n} \right]^{\frac{1}{n+1}}$$

Poisson ratio: $\nu = 0.33$

$$\Rightarrow g(n) = 2.1 \quad (n=10)$$

This can be found from Fig. 3 by normalizing

$$\frac{\sigma_{yy}}{\sigma_y} = \left[\frac{\nu}{(K/\sigma_y)^2} \right]^{-\frac{1}{n+1}} g(n) \quad ; \quad n=10$$

$$K_{IC} = \sqrt{l_0^6} \frac{(\sigma_y^*)^{\frac{n+1}{2}}}{\sigma_y^{\frac{n-1}{2}}} g(\ln) \quad -\frac{n+1}{2}$$

$\Rightarrow \sigma_y(T, \dot{\epsilon}) =$ as in previous equations

This includes a critical stress criterion at a microstructural length l_0^6 ($\approx 2d_g$, twice the grain size) and a small-scale HRR stress field (lower shell K_{IC})

$$l_0^6 \approx 2 \times 25 \mu\text{m} = 50 \mu\text{m}$$

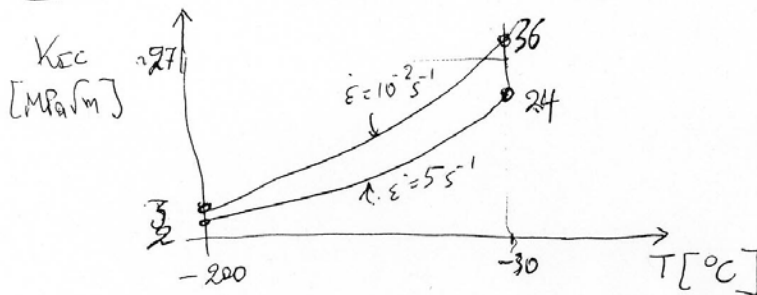
$$K_{IC} = 1.2 \times 10^{-4} \frac{\sigma_y^{*5.5}}{\sigma_y^{4.5}} \text{ MPa}\sqrt{\text{m}}$$

For $\dot{\epsilon} = 10^{-2} \text{ s}^{-1}$

$$\Rightarrow K_{IC} = 6.4 \times 10^{-4} (273 + T_c)^{1.94} \text{ MPa}\sqrt{\text{m}}$$

For $\dot{\epsilon} = 5 \text{ s}^{-1}$

$$\Rightarrow K_{IC} = 4.9 \times 10^{-4} (273 + T_c)^{1.94} \text{ MPa}\sqrt{\text{m}}$$



(b) Upper shelf region: $0 < T_c < 200^\circ\text{C}$
 Failure micromechanism is void growth and coalescence.

$$K_{Ic} = A \sqrt{l_0^* \epsilon_f^* \sigma_y E (1-\nu^2)}$$

The equivalent plastic strain, ϵ_f^* , is related to the crack-tip opening displacement, δ_c . Using the results of Ritchie (Fig. 3) (or Fig. 4)

$$\epsilon_f^* = 0.35 \frac{\delta_c}{x} \approx 0.35 \frac{\delta_c}{l_0^*}$$

Elastic strain: $\frac{\sigma_y}{E} \approx 0.0025$

($l_0^* = 50 \mu\text{m}$)

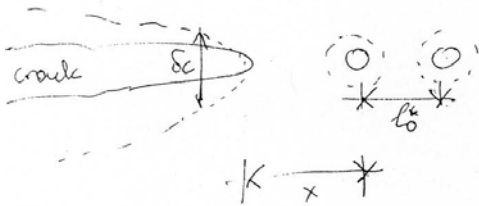
↳ spacing between voids

$$\delta_c = 0.6 \frac{K_{Ic}^2}{E \sigma_y}$$

($E \approx 200 \text{ GPa}$)

$$K_{Ic} \approx 2.2 \sqrt{l_0^* \epsilon_f^* E \sigma_y}$$

$$\Rightarrow K_{Ic} = 43.6 \sqrt{\sigma_y^2 \epsilon_f^* l_0^*} \quad [\text{MPa}\sqrt{\text{m}}]$$



$\epsilon_f^* \rightarrow \bar{\epsilon}_f$
 Fig. 2 gives the ratio of the hydrostatic stress versus the effective stress:

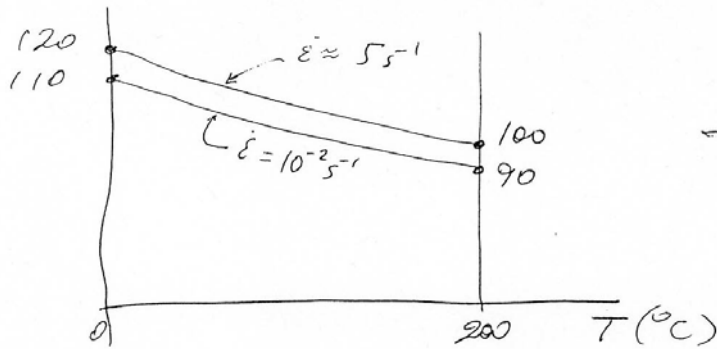
$$\sigma_m / \bar{\sigma}$$

$$\frac{\delta_c}{l_0^*} \approx 0.9$$

From Figure 4 $\Rightarrow \begin{cases} \frac{x}{\delta_c} \rightarrow \frac{x}{\delta_c} : \bar{\epsilon}_p \approx 0.46 \frac{\delta_c}{x} - 0.2 \\ \bar{\epsilon}_p \rightarrow \bar{\epsilon}_f^* \text{ (from curve fit)} \end{cases}$

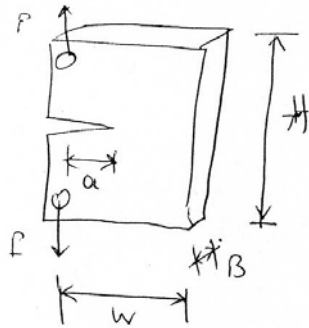
σ_y is as in question (a)

$$\begin{cases} \sigma_m / \bar{\sigma} \approx 1.2 \\ \text{Fig. 2} \Rightarrow \bar{\epsilon}_f \approx 0.24 \end{cases}$$



Note the opposite effect from the low-soft region!

(c) A typical example of a single crack specimen geometry is a CT-specimen



(from ASTM:
 $H \sim 1.2W$
 $\frac{a}{w} > 0.5$)

Valid K_{Ic} test: $a, B, (w-a), H > 2.5 \left(\frac{K_{Ic}}{\sigma_y} \right)^2$

Valid J_{Ic} test: $a, B, (w-a), H > 2.5 \frac{K_{Ic}^2 (1-\nu^2)}{\sigma_y E}$
 $\frac{J_{Ic}}{\sigma_y}$

For valid K_{Ic} tests for all temperatures and strain rates, we must maximize $\left(\frac{K_{Ic}}{\sigma_y}\right)^2$.

This occurs in the upper-shelf region under static conditions. Using the previous results:

$$\max\left(\frac{K_{Ic}}{\sigma_y}\right)^2 \approx 0.14 \Rightarrow \underline{a_1, B, (w-a)} > 36 \text{ cm}$$

• For valid J_{Ic} tests for all temperatures and strain rates (assuming that $E \approx 200 \text{ GPa}$ and $\nu \approx 0.33$ independent of temperature), we must

maximize $\frac{K_{Ic}^2}{\sigma_y}$. This occurs in the upper-shelf region under static condition. Using the previous

results:

$$\max\left(\frac{K_{Ic}^2}{E\sigma_y}\right) = 0.032$$

$$\Rightarrow \underline{a_1, B, (w-a)} > 0.79 \text{ cm}$$

(d) Neutron irradiation :

- increases the yield strength
- reduces the strain hardening exponent
- critical fracture stress unaffected

$$\Rightarrow \begin{cases} \sigma_y^* \text{ constant} \\ n \text{ increasing} \\ \sigma_y \text{ increasing} \end{cases}$$

Lower-self fracture :

$$K_{IC} = \sqrt{C_0} \frac{(\sigma_y^*)^{\frac{n+1}{2}}}{\sigma_y^{\frac{n-1}{2}}} g(n)^{-\frac{n+1}{2}} \quad \text{with } n \geq 1$$

Microstructural size l_0^* constant (assumed)


$g(n)$ weak function of n

$\Rightarrow g(n)^{-\frac{n+1}{2}}$ increases slowly with n

$(\sigma_y^*)^{\frac{n+1}{2}}$ decreases very fast with n

$\sigma_y^{\frac{n-1}{2}}$ decreases slowly with n , if σ_y is increasing

\Rightarrow K_{IC} is decreasing with σ_y and n



The influence of temperature could be important close to the transition temperature: the decrease could be smaller.

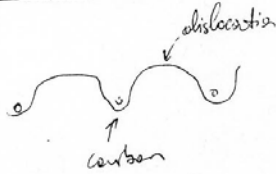
e) Austenitizing temperature controls the carbon content in steels. (increase it)

Small amounts of carbon increase the yield strength of steel, because carbon atoms can pin dislocations. Therefore, $\sigma_y \uparrow$. ^{As a result} increasing the austenitizing temperature (AT), decreases the fracture toughness in the lower shelf regime and increases it in the upper shelf regime. So at low operating temperatures, the austenitizing temperature is detrimental and at high operating temperatures, the austenitizing temperature is beneficial.


High amount of carbon segregates into microparticles

and may promote void growth due to the brittleness of the carbon microparticles (creates voids)

Pinning of dislocation



Voids



Finally, the austenite temperature makes material transformation during the heat treatment more difficult, reducing the mechanical properties.

In addition, austenitization increases the grain size of austenite phase (FCC). According to Hall-Petch law the yield strength decreases with increasing grain size ($\sigma_y \sim d_g^{-1/2}$). Therefore, the toughness should increase (because also $\sigma_c \sim d_g$).

Typical austenitization condition: 900°C for several hours.