

Unit 5: The Cross Product

---

1.5.1(L)

---

We know that one such vector is, by definition,  $\vec{A} \times \vec{B}$ . In fact, any other such vector must be a scalar multiple of  $\vec{A} \times \vec{B}$ .

Now, since  $\vec{A} = 3\vec{i} + 4\vec{j} + 5\vec{k}$  and  $\vec{B} = 2\vec{i} + 6\vec{j} + 7\vec{k}$ , we have that

$$\vec{V} = (3\vec{i} + 4\vec{j} + 5\vec{k}) \times (2\vec{i} + 6\vec{j} + 7\vec{k}) \quad (1)$$

is the vector we seek.

The point is that to compute  $\vec{V}$  in Cartesian coordinates we do not need any "formal recipes." Rather, we may proceed structurally by use of the distributive property of cross products.

That is:

$$\begin{aligned} (3\vec{i} + 4\vec{j} + 5\vec{k}) \times (2\vec{i} + 6\vec{j} + 7\vec{k}) &= 3\vec{i} \times (2\vec{i} + 6\vec{j} + 7\vec{k}) \\ &\quad + 4\vec{j} \times (2\vec{i} + 6\vec{j} + 7\vec{k}) \\ &\quad + 5\vec{k} \times (2\vec{i} + 6\vec{j} + 7\vec{k}) \\ &= (3\vec{i} \times 2\vec{i}) + (3\vec{i} \times 6\vec{j}) \\ &\quad + (3\vec{i} \times 7\vec{k}) + (4\vec{j} \times 2\vec{i}) \\ &\quad + (4\vec{j} \times 6\vec{j}) + (4\vec{j} \times 7\vec{k}) \\ &\quad + (5\vec{k} \times 2\vec{i}) + (5\vec{k} \times 6\vec{j}) \\ &\quad + (5\vec{k} \times 7\vec{k}) \end{aligned} \quad (2)$$

By the associative property that  $m\vec{A} \times n\vec{B} = mn \vec{A} \times \vec{B}$ , equation (2) may be rewritten as

$$\begin{aligned} 6\vec{i} \times \vec{i} + 18\vec{i} \times \vec{j} + 21\vec{i} \times \vec{k} + 8\vec{j} \times \vec{i} + 24\vec{j} \times \vec{j} + 28\vec{j} \times \vec{k} \\ + 10\vec{k} \times \vec{i} + 30\vec{k} \times \vec{j} + 35\vec{k} \times \vec{k} \end{aligned} \quad (3)$$

If we next observe that

Solutions  
 Block 1: Vector Arithmetic  
 Unit 5: The Cross Product

---

1.5.1(L) continued

$$\vec{i} \times \vec{i} = \vec{j} \times \vec{j} = \vec{k} \times \vec{k} = \vec{0}$$

while  $\vec{i} \times \vec{j} = \vec{k}$ ,  $\vec{j} \times \vec{k} = \vec{i}$  and  $\vec{k} \times \vec{i} = \vec{j}$ , we see that equation (3) becomes

$$\begin{aligned} 6\vec{0} + 18\vec{k} - 21\vec{j} - 8\vec{k} + 24\vec{0} + 28\vec{i} + 10\vec{j} - 30\vec{i} + 35\vec{0} = \\ -2\vec{i} - 11\vec{j} + 10\vec{k} \end{aligned} \quad (4)$$

The determinant technique merely allows us to obtain the answer in a more compact form. Namely,

$$\begin{aligned} \vec{V} &= \begin{vmatrix} \vec{i} & \vec{j} & \vec{k} \\ 3 & 4 & 5 \\ 2 & 6 & 7 \end{vmatrix} \\ &= \vec{i} \begin{vmatrix} 4 & 5 \\ 6 & 7 \end{vmatrix} - \vec{j} \begin{vmatrix} 3 & 5 \\ 2 & 7 \end{vmatrix} + \vec{k} \begin{vmatrix} 3 & 4 \\ 2 & 6 \end{vmatrix} \\ &= \vec{i}(28 - 30) - \vec{j}(21 - 10) + \vec{k}(18 - 8) \\ &= -2\vec{i} - 11\vec{j} + 10\vec{k} \end{aligned} \quad (5)$$

The fact that (4) and (5) are identical indicates the convenience of the determinant method in finding the same answer that the direct method yields.

The main point is that by the arithmetic of vectors we can show directly that

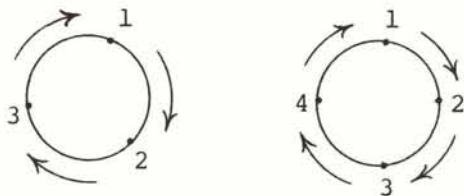
$$\begin{aligned} (a_1\vec{i} + a_2\vec{j} + a_3\vec{k}) \times (b_1\vec{i} + b_2\vec{j} + b_3\vec{k}) &= (a_2b_3 - a_3b_2)\vec{i} \\ &+ (a_3b_1 - a_1b_3)\vec{j} \\ &+ (a_1b_2 - a_2b_1)\vec{k} \end{aligned} \quad (6)$$

---

\*Note the need for stressing order. Namely,  $\vec{i} \times \vec{k} = -(\vec{k} \times \vec{i})$  not  $\vec{k} \times \vec{i}$ . Consequently, since  $\vec{k} \times \vec{i} = \vec{j}$ ,  $\vec{i} \times \vec{k} = -\vec{j}$ .

1.5.1(L) continued

Notice that (6) has a rather distinctive, easy-to-remember form quite apart from the determinant notation. Namely, only the second and third subscripts appear in the first (i.e., the  $\hat{i}$ ) component, only the first and third subscripts appear in the second component, and only the first and second subscripts appear in the third component. Moreover, the term is positive if the subscripts appear in the correct cyclic order and negative otherwise. By cyclic order, we merely mean: write 1, 2, and 3 in the given order and imagine them to be arranged on a circle rather than on a straight line. Then a cyclic rearrangement is any one that may be obtained by starting at any of the three numbers and proceeding in the direction of 123. That is 231 and 312 are cyclic arrangements of 123. In a similar way the cyclic arrangements of 1234 are 2341, 3412, and 4123. Pictorially,



It is simply that equation (6) is easier to remember in the determinant form. We want those who are not too familiar with determinant notation to realize that there is no need to know determinants to find cross products. In still other words, had determinants not already been invented for better reasons, it is unlikely they would have been invented to compute cross products.

---

1.5.2(L)

- a. From the points  $A(1,2,3)$ ,  $B(3,3,5)$  and  $C(4,8,1)$ , we may form the vectors  $\vec{AB}$  and  $\vec{AC}$ . We then know that for a line to be perpendicular to a plane it must be perpendicular to each line in the plane. In particular, the line we seek must be perpendicular to both  $AB$  and  $AC$ . If we vectorize the problem, we seek a vector perpendicular to both  $\vec{AB}$  and  $\vec{AC}$ , but from the material of this unit, we know that one such vector is  $\vec{AB} \times \vec{AC}$ . Since  $\vec{AB} = (2,1,2)$  and  $\vec{AC} = (3,6,-2)$ , we have:

Solutions  
Block 1: Vector Arithmetic  
Unit 5: The Cross Product

---

1.5.2(L) continued

$$\begin{aligned}\vec{AB} \times \vec{AC} &= \begin{vmatrix} \vec{i} & \vec{j} & \vec{k} \\ 2 & 1 & 2 \\ 3 & 6 & -2 \end{vmatrix} \\ &= (-2 - 12)\vec{i} - \vec{j}(-4 - 6) + \vec{k}(12 - 3) \\ &= -14\vec{i} + 10\vec{j} + 9\vec{k}\end{aligned}$$

Thus, the correct answer to (a) is any scalar multiple of  $-14\vec{i} + 10\vec{j} + 9\vec{k}$ .

Notice that there was nothing sacred about choosing  $\vec{AB}$  and  $\vec{AC}$  as our vectors. For example, we might have elected to pick  $\vec{AB}$  and  $\vec{BC}$  as our pair of vectors. In this case,  $\vec{BC} = (1, 5, -4)$  and then  $\vec{AB} \times \vec{BC}$  would be given by

$$\begin{vmatrix} \vec{i} & \vec{j} & \vec{k} \\ 2 & 1 & 2 \\ 1 & 5 & -4 \end{vmatrix}$$

or

$$(-4 - 10)\vec{i} + (-8 - 2)(-\vec{j}) + (10 - 1)\vec{k}$$

which is again  $-14\vec{i} + 10\vec{j} + 9\vec{k}$ .

- b. In part (a) we found a vector perpendicular to a plane by computing a cross product of two vectors in the plane. In the example we chose, the cross product was the same in both cases. In general, we would not expect two different pairs of vectors in the plane to give the same cross product although we would expect the answers to be scalar multiples of one another. The reason that both answers were the same in (a) is part of our study in (b). The key point is that if the vectors  $\vec{A}$  and  $\vec{B}$  are placed at a common origin, we may think of the parallelogram determined by  $\vec{A}$  and  $\vec{B}$  as adjacent sides. In this case, the magnitude of  $\vec{A} \times \vec{B}$  denotes the area of the parallelogram.

In particular, the parallelogram which has  $\vec{AB}$  and  $\vec{AC}$  as adjacent sides has area equal to  $|\vec{AB} \times \vec{AC}|$ . Of course, this is the same parallelogram as the one which has  $\vec{AB}$  and  $\vec{BC}$  as adjacent sides.

Solutions  
Block 1: Vector Arithmetic  
Unit 5: The Cross Product

---

1.5.2(L) continued

Hence, the area of this parallelogram is also given by  $\vec{AB} \times \vec{BC}$ . This will explain geometrically why  $\vec{AB} \times \vec{BC}$  and  $\vec{AB} \times \vec{AC}$  could at "worst" be the negatives of one another. Namely, they have the same direction (both are perpendicular to the same plane) and they have the same magnitude (the area of the parallelogram).

- c. The point now is that triangle ABC has half the area of the parallelogram formed by  $\vec{AB}$  and  $\vec{AC}$ , and as seen in our discussion of (b) the area of the parallelogram is given by  $|\vec{AB} \times \vec{AC}|$ .

Accordingly, the area of the triangle is given by

$$|\vec{AB} \times \vec{AC}|/2$$

or

$$\sqrt{(-14)^2 + (10)^2 + (9)^2}/2$$

or

$$\sqrt{377}/2 \approx 19.4/2 = 9.7$$

---

1.5.3(L)

- a. As an introductory aside, let us first observe that the concept of skew lines exists in three-dimensional geometry but not in two-dimensional geometry. That is, when we say that parallel lines are lines which do not intersect, we are assuming that the lines being considered all lie in the same plane. Clearly, however, given two non-intersecting lines in three-dimensional space it might well happen that there is no one plane which contains both lines.

When two lines in different planes do not intersect we call these lines a pair of skew lines. It seems natural (hopefully) to define the distance between skew lines as follows. There are infinitely many planes that can pass through a given line. Essentially, once we have one plane that passes through the line we may rotate that

1.5.3(L) continued

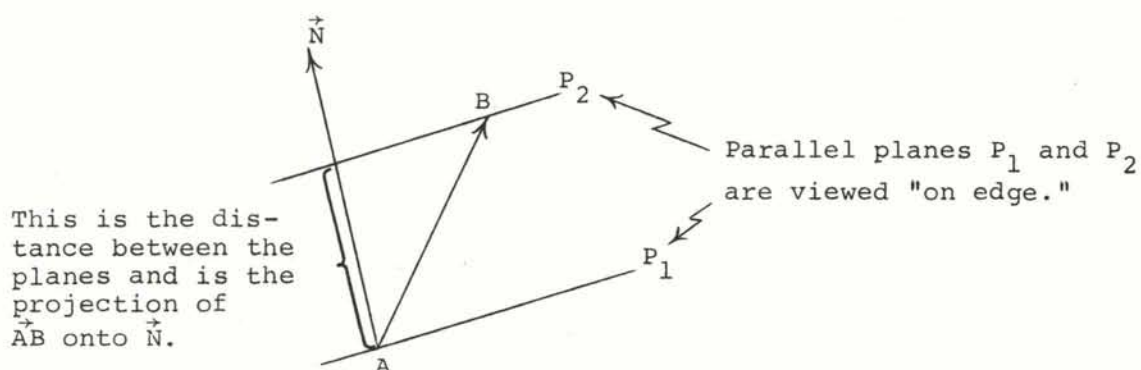
plane about the line, and in this way we change the position of the plane (hence we change the plane) but it still passes through the given line.

We pass planes through each of the lines and we then "pivot" the planes until they are parallel. Stated more concisely, we imbed the lines in a pair of parallel planes. We then define the distance between the skew lines to be the (perpendicular) distance between the two parallel planes.

While the study of planes and lines is the subject of the next unit, most of the basic ideas are already available to us.

We should point out that there are other ways of defining the distance. For example, we could pick a point on one line and drop a perpendicular from that point to the other line. That would be the distance from that particular point on one line to the other. We could then repeat this procedure (sort of like a max-min calculus problem) for each point on the first line, and the minimum distance from a point on the first line to the second line could be defined as the distance between the two lines. It should not be too hard to check, however, that the method we outlined earlier is equivalent to this method but a bit easier to handle computationally.

- b. A rather convenient way of finding the distance between two parallel planes is to form a vector  $\vec{AB}$  from the point A in one of the planes to a point B in the other, and then project this vector onto a vector  $\vec{N}$  which is perpendicular to both planes. Pictorially,



1.5.3(L) continued

It is the dot product that allows us, in terms of vectors, to project one line onto another. In the present case, the distance we seek is the magnitude of  $\vec{AB} \cdot \vec{u}_N$  where  $\vec{u}_N$  is a unit vector in the direction of  $N$ . (See Exercises 1.4.6 and 1.4.7 as a review if necessary.)

All that we need now is a vector perpendicular to the parallel planes which contain our given skew lines. Here we employ the properties of the cross product. Namely, let us vectorize the given skew lines and call the resulting vectors  $\vec{v}$  and  $\vec{w}$ . Clearly a vector perpendicular to a plane is perpendicular to every line in the plane. Hence, the vector we seek must, in particular, be perpendicular to both  $\vec{v}$  and  $\vec{w}$ . This means that  $\vec{v} \times \vec{w}$  will be one such vector.

Putting our discussion all together, we now have a rather straightforward recipe. Specifically,

- Step 1. Vectorize each of the skew lines, calling the vectors, say,  $\vec{v}$  and  $\vec{w}$ .
- Step 2. Form  $\vec{v} \times \vec{w}$ . (Summarizing our discussion above, this is a vector perpendicular to a pair of parallel planes which "house" the lines.)
- Step 3. Let  $\vec{c}$  denote a vector that originates at the first line and terminates at the second line.
- Step 4. Dot  $\vec{c}$  with the unit vector in the direction of  $\vec{v} \times \vec{w}$  (that is, project  $\vec{c}$  onto  $\vec{v} \times \vec{w}$ ).

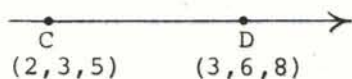
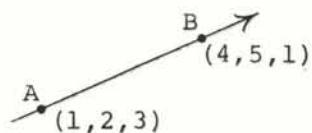
The magnitude of the number obtained in Step 4 is the desired distance.

- c. This is just an application of parts (a) and (b). In this case we have

Solutions  
 Block 1: Vector Arithmetic  
 Unit 5: The Cross Product

---

1.5.3(L) continued



Therefore,

$$\vec{AB} = (4-1, 5-2, 1-3) = (3, 3, -2)$$

$$\vec{CD} = (3-2, 6-3, 8-5) = (1, 3, 3)$$

Hence, a vector  $\vec{N}$  perpendicular to a pair of parallel planes which house our two skew lines is given by

$$\vec{N} = \vec{AB} \times \vec{CD} = \begin{vmatrix} \vec{i} & \vec{j} & \vec{k} \\ 3 & 3 & -2 \\ 1 & 3 & 3 \end{vmatrix} = \vec{i}(9+6) - \vec{j}(9+2) + \vec{k}(9-3)$$

$$= 15\vec{i} - 11\vec{j} + 6\vec{k}$$

Therefore,

$$\vec{u}_N = \frac{15\vec{i} - 11\vec{j} + 6\vec{k}}{|15\vec{i} - 11\vec{j} + 6\vec{k}|} = \frac{15\vec{i} - 11\vec{j} + 6\vec{k}}{\sqrt{15^2 + (-11)^2 + 6^2}} = \frac{15\vec{i} - 11\vec{j} + 6\vec{k}}{\sqrt{382}}$$

Therefore, the desired distance is given by

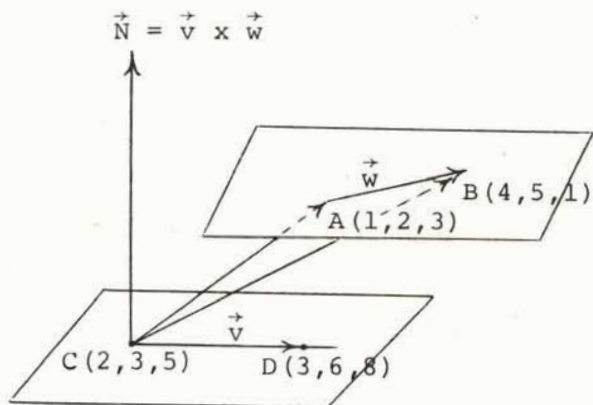
$$\begin{aligned} |\vec{CB} \cdot \vec{u}_N| &= (4-2, 5-3, 1-5) \cdot \frac{(15, -11, 6)}{\sqrt{382}} = \frac{|(2, 2, -4) \cdot (15, -11, 6)|}{\sqrt{382}} \\ &= \frac{|30 - 22 - 24|}{\sqrt{382}} = \frac{16}{\sqrt{382}} = \frac{16\sqrt{382}}{382} = \frac{8\sqrt{382}}{191} \end{aligned}$$



Solutions  
 Block 1: Vector Arithmetic  
 Unit 5: The Cross Product

1.5.3(L) continued

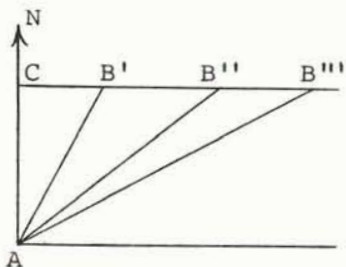
Pictorial Summary



Note: Had we used  $\vec{CA}$ , say, instead of  $\vec{CB}$ , the distance would have been given by

$$\begin{aligned} |\vec{CA} \cdot \vec{u}_N| &= |(-1, -1, -2) \cdot \frac{(15, -11, 6)}{\sqrt{382}}| \\ &= \frac{|-15 + 11 - 12|}{\sqrt{382}} \\ &= \frac{16}{\sqrt{382}} \end{aligned}$$

which agrees with our previous answer. In other words, as one would probably expect, the distance between the lines is independent of the point of reference we choose on each line. Pictorially, in terms of a "side view"



$\vec{AC}$  is the vector projection of  $\vec{AB}'$ ,  $\vec{AB}''$ ,  $\vec{AB}'''$  onto  $N$ .

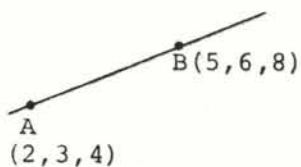
Solutions  
Block 1: Vector Arithmetic  
Unit 5: The Cross Product

---

1.5.4

---

$$\underline{C(4, 5, 9) \quad D(6, 11, 14)}$$



$$\vec{AB} = (3, 3, 4)$$

$$\vec{CD} = (2, 6, 5)$$

$$\vec{N} = \vec{AB} \times \vec{CD} = \begin{vmatrix} \vec{i} & \vec{j} & \vec{k} \\ 3 & 3 & 4 \\ 2 & 6 & 5 \end{vmatrix} = \vec{i}(15 - 24) - \vec{j}(15 - 8) + \vec{k}(18 - 6)$$

$$= -9\vec{i} - 7\vec{j} + 12\vec{k}$$

$$|\vec{N}| = \sqrt{(-9)^2 + (-7)^2 + (12)^2} = \sqrt{274}$$

Therefore,

$$\vec{u}_N = \frac{(-9, -7, 12)}{\sqrt{274}}$$

$$\text{Distance between lines} = |\vec{AC} \cdot \vec{u}_N|$$

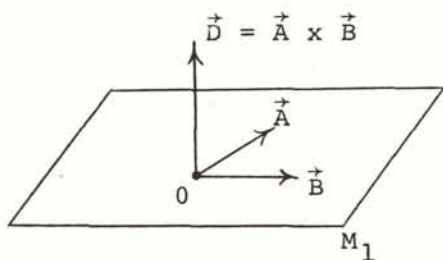
$$= \left| (2, 2, 5) \cdot \frac{(-9, -7, 12)}{\sqrt{274}} \right|$$

$$= \frac{|-18 - 14 + 60|}{\sqrt{274}} = \frac{28}{\sqrt{274}} = \frac{28\sqrt{274}}{274} = \frac{14\sqrt{274}}{137}$$

$$\approx 1.7$$

1.5.5(L)

- a. By the definition of cross product, the vector  $(\vec{A} \times \vec{B}) \times \vec{C}$  is perpendicular to both  $(\vec{A} \times \vec{B})$  and  $\vec{C}$ . We first observe that any vector perpendicular to  $\vec{A} \times \vec{B}$  must itself be parallel to the plane determined by  $\vec{A}$  and  $\vec{B}$ . That is, if, for example, we let  $\vec{D} = \vec{A} \times \vec{B}$ , the locus of all vectors perpendicular to  $\vec{D}$  is a plane to which  $\vec{D}$  is perpendicular. (We say "a plane" but it might just as well be "the plane" if we utilize the fact that we may move any vector to any starting place. In other words, we may assume that  $\vec{A}$  and  $\vec{B}$  have a common origin and that all other vectors under consideration share this origin.) But, since  $\vec{D}$  is perpendicular to both  $\vec{A}$  and  $\vec{B}$  it is perpendicular to the plane determined by  $\vec{A}$  and  $\vec{B}$ . Thus, the locus of all vectors perpendicular to  $\vec{D}$  ( $= \vec{A} \times \vec{B}$ ) is the plane determined by  $\vec{A}$  and  $\vec{B}$ . Pictorially,



Any vector through 0 perpendicular to  $\vec{D}$  is in the plane  $M_1$  determined by  $\vec{A}$  and  $\vec{B}$ .

In other words, if  $\vec{A}$  and  $\vec{B}$  are non-parallel, the vector  $(\vec{A} \times \vec{B}) \times \vec{C}$  lies in the plane determined by  $\vec{A}$  and  $\vec{B}$  (if they are parallel then they do not determine a plane) and at the same time is perpendicular to  $\vec{C}$ .

We may rephrase our answer more geometrically as follows. We look at the plane determined by  $\vec{A}$  and  $\vec{B}$  (all that is required for this plane to exist is that  $\vec{A}$  and  $\vec{B}$  not be parallel\*). Call this plane  $M_1$ . We then take the plane which has  $\vec{C}$  as its perpendicular

---

\*If  $\vec{A}$  and  $\vec{B}$  are parallel then  $\vec{A} \times \vec{B} = \vec{0}$  whence  $(\vec{A} \times \vec{B}) \times \vec{C} = \vec{0}$  and the discussion is then "trivial." Similarly, if  $\vec{A}$  and  $\vec{B}$  are not parallel,  $(\vec{A} \times \vec{B}) \times \vec{C}$  will still equal  $\vec{0}$  if  $\vec{C}$  is parallel to  $(\vec{A} \times \vec{B})$  since the cross product of parallel vectors always yields the zero vector. In other words, if either  $\vec{A}$  and  $\vec{B}$  are scalar multiples of one another or if  $\vec{C}$  is normal to the plane determined by  $\vec{A}$  and  $\vec{B}$ , the vector  $(\vec{A} \times \vec{B}) \times \vec{C}$  is the zero vector.

1.5.5(L) continued

(normal). (Keep in mind that we are assuming that all vectors originate at the same point in our discussion.) Call this plane  $M_2$ . Now, unless  $M_2$  and  $M_1$  are parallel they intersect in a line. This line determines the direction of  $(\vec{A} \times \vec{B}) \times \vec{C}$ .

- b. The same argument as in (a) indicates that the vector  $\vec{A} \times (\vec{B} \times \vec{C})$  is perpendicular to  $\vec{A}$  and lies in the plane determined by  $\vec{B}$  and  $\vec{C}$ . Among other things, then:

$(\vec{A} \times \vec{B}) \times \vec{C}$  lies in the  $\vec{A}$ - $\vec{B}$  plane

while

$\vec{A} \times (\vec{B} \times \vec{C})$  lies in the  $\vec{B}$ - $\vec{C}$  plane.

Clearly the  $\vec{A}$ - $\vec{B}$  plane and the  $\vec{B}$ - $\vec{C}$  plane need not be the same, which proves the assertion in (b).

In other words, the cross product of three vectors is not an associative operation. This means, in particular, that we must be careful in dealing with any arithmetic involving the cross product. It is such a common thing for us, based on our past experience with multiplication, to assume that  $\vec{A} \times \vec{B} \times \vec{C}$  is unambiguous that we can make serious errors if we arbitrarily shift the parentheses in the expression  $\vec{A} \times (\vec{B} \times \vec{C})$  (for example, we just showed that it can change the plane in which the vector lies).

---

1.5.6

A vector which lies in the plane of  $\vec{A}$  and  $\vec{B}$  and which is perpendicular to  $\vec{C}$ , as we saw in the previous exercise, is  $(\vec{A} \times \vec{B}) \times \vec{C}$ .

Since  $\vec{A} = (1, 2, 3)$ ,  $\vec{B} = (3, 5, 4)$ , and  $\vec{C} = (6, 8, 9)$  we have:

$$\begin{aligned}\vec{A} \times \vec{B} &= \begin{vmatrix} \vec{i} & \vec{j} & \vec{k} \\ 1 & 2 & 3 \\ 3 & 5 & 4 \end{vmatrix} = \vec{i}(8 - 15) - \vec{j}(4 - 9) + \vec{k}(5 - 6) \\ &= -7\vec{i} + 5\vec{j} - \vec{k}\end{aligned}$$

Solutions  
Block 1: Vector Arithmetic  
Unit 5: The Cross Product

---

1.5.6 continued

Therefore,

$$\begin{aligned}(\vec{A} \times \vec{B}) \times \vec{C} &= \begin{vmatrix} \vec{i} & \vec{j} & \vec{k} \\ -7 & 5 & -1 \\ 6 & 8 & 9 \end{vmatrix} = \vec{i}(45 + 8) - \vec{j}(-63 + 6) + \vec{k}(-56 - 30) \\ &= 53\vec{i} + 57\vec{j} - 86\vec{k}\end{aligned}$$

(We could also have used the formula  $(\vec{A} \times \vec{B}) \times \vec{C} = (\vec{A} \cdot \vec{C})\vec{B} - (\vec{B} \cdot \vec{C})\vec{A}$  where  $\vec{A} \cdot \vec{C} = (1, 2, 3) \cdot (6, 8, 9) = 6 + 16 + 27 = 49$  and  $\vec{B} \cdot \vec{C} = (3, 5, 4) \cdot (6, 8, 9) = 18 + 40 + 36 = 94$ . Then

$$\begin{aligned}(\vec{A} \cdot \vec{C})\vec{B} - (\vec{B} \cdot \vec{C})\vec{A} &= 49(3, 5, 4) - 94(1, 2, 3) \\ &= (147, 245, 196) + (-94, -188, -282) \\ &= (53, 57, -86)\end{aligned}$$

which agrees with our earlier answer.)

---

1.5.7

In the expression  $(\vec{A} \times \vec{B}) \times \vec{C} = (\vec{A} \cdot \vec{C})\vec{B} - (\vec{B} \cdot \vec{C})\vec{A}$  it is more important to note that  $\vec{A}$  denotes the first vector,  $\vec{B}$  the second, and  $\vec{C}$  the third than to note the names  $\vec{A}$ ,  $\vec{B}$ ,  $\vec{C}$  themselves.

More symbolically,

$$(\vec{1} \times \vec{2}) \times \vec{3} = (\vec{1} \cdot \vec{3})\vec{2} - (\vec{2} \cdot \vec{3})\vec{1}$$

With this in mind, we have

1.5.7 continued

$$\begin{aligned}\vec{A} \times (\vec{B} \times \vec{C}) &= -[(\vec{B} \times \vec{C}) \times \vec{A}]^* \\ &= -[(\vec{B} \cdot \vec{A})\vec{C} - (\vec{C} \cdot \vec{A})\vec{B}] \\ &= -(\vec{B} \cdot \vec{A})\vec{C} + (\vec{C} \cdot \vec{A})\vec{B} \\ &= (\vec{A} \cdot \vec{C})\vec{B} - (\vec{A} \cdot \vec{B})\vec{C}\end{aligned}$$

---

1.5.8

a. 
$$\begin{aligned}(\vec{A} \times \vec{B}) \times (\vec{C} \times \vec{D}) &= (\vec{A} \times \vec{B}) \times \vec{E} \\ &= (\vec{A} \cdot \vec{E})\vec{B} - (\vec{B} \cdot \vec{E})\vec{A} \\ &= [\vec{A} \cdot (\vec{C} \times \vec{D})]\vec{B} - [\vec{B} \cdot (\vec{C} \times \vec{D})]\vec{A}\end{aligned}$$

- b. The vector must be in both the  $\vec{A}$ - $\vec{B}$  plane and the  $\vec{C}$ - $\vec{D}$  plane. Hence, it is in the intersection of the two planes.

In other words, except in degenerate cases,  $(\vec{A} \times \vec{B}) \times (\vec{C} \times \vec{D})$  vectorizes the line of intersection between the plane determined by  $\vec{A}$  and  $\vec{B}$  and the plane determined by  $\vec{C}$  and  $\vec{D}$ .

---

1.5.9

In general, we may think of three vectors emanating from a common point as determining a parallelepiped (which is the three-dimensional analog of a parallelogram, namely, it is a 6-sided figure whose opposite faces are congruent parallelograms). The volume of any parallelepiped is the product of the area of its base and its height. If we think of  $\vec{B}$  and  $\vec{C}$  as forming the base, then from what we have already seen it is clear that  $|\vec{B} \times \vec{C}|$  denotes the area of the parallelogram which is the base of our solid. The height of the solid is the perpendicular distance from  $\vec{A}$  onto the base, and this is precisely  $|\vec{A} \cos \theta|$ , where  $\theta$  is the angle between  $\vec{A}$  and  $\vec{B} \times \vec{C}$  (see Figure 1).

---

\*Note that our established recipe requires the form  $(\vec{1} \times \vec{2}) \times \vec{3}$  not  $\vec{1} \times (\vec{2} \times \vec{3})$ . We obtained the desired form by recalling that  $\vec{V} \times \vec{W} = -[\vec{W} \times \vec{V}]$ .

1.5.9 continued

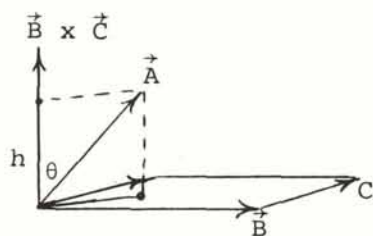


Figure 1

Putting this all together, we see that the volume of the parallel-epiped is given by

$$|\vec{A}| |\vec{B} \times \vec{C}| |\cos \theta|$$

(where  $\theta$  is the angle between  $\vec{A}$  and  $\vec{B} \times \vec{C}$ ) and by definition of the dot product this is

$$|\vec{A} \cdot (\vec{B} \times \vec{C})| \tag{1}$$

This is a good structural example of where both types of vector products are used in the same formula. Notice also that, except for emphasis, the parentheses in (1) are redundant since  $(\vec{A} \cdot \vec{B}) \times \vec{C}$  would be meaningless because  $\vec{A} \cdot \vec{B}$  is a scalar, and we only "cross" vectors.

Formula (1) gives us a very convenient test for determining whether three vectors are in the same plane, as well as for finding the volume of parallelepipeds. Namely, if our three vectors lie in the same plane, the volume of the parallelepiped they generate is zero (since in this case all three vectors lie, say, in the base).

If our vectors are given in Cartesian form, equation (1) takes on a particularly convenient computational form. Namely, let  $\vec{A} = (a_1, a_2, a_3)$ ,  $\vec{B} = (b_1, b_2, b_3)$ , and  $\vec{C} = (c_1, c_2, c_3)$ . Then  $\vec{B} \times \vec{C} = (b_2c_3 - b_3c_2, b_3c_1 - b_1c_3, b_1c_2 - b_2c_1)$ , whereupon  $\vec{A} \cdot (\vec{B} \times \vec{C})$  becomes

$$a_1(b_2c_3 - b_3c_2) + a_2(b_3c_1 - b_1c_3) + a_3(b_1c_2 - b_2c_1)$$

Solutions  
Block 1: Vector Arithmetic  
Unit 5: The Cross Product

---

1.5.9 continued

and it is then easily verified that the above form is equivalent to the 3 by 3 determinant

$$\begin{vmatrix} a_1 & a_2 & a_3 \\ b_1 & b_2 & b_3 \\ c_1 & c_2 & c_3 \end{vmatrix}$$

With these remarks in mind, we have:

- a. The vectors  $\vec{A}$ ,  $\vec{B}$ , and  $\vec{C}$  are in the same plane if and only if  $\vec{A} \cdot (\vec{B} \times \vec{C}) = 0$  (where, of course, 0 refers to the number zero since a dot product is a scalar).
- b. In this case,

$$\begin{aligned} \vec{A} \cdot (\vec{B} \times \vec{C}) &= \begin{vmatrix} 1 & 1 & 1 \\ 2 & 3 & 4 \\ 3 & 4 & 5 \end{vmatrix} \\ &= 1 \begin{vmatrix} 3 & 4 \\ 4 & 5 \end{vmatrix} - 1 \begin{vmatrix} 2 & 4 \\ 3 & 5 \end{vmatrix} + 1 \begin{vmatrix} 2 & 3 \\ 3 & 4 \end{vmatrix} \\ &= (15 - 16) - (10 - 12) + (8 - 9) \\ &= -1 + 2 - 1 = 0, \end{aligned}$$

which is the required condition that  $\vec{A}$ ,  $\vec{B}$ , and  $\vec{C}$  all lie in one plane.

- c. In this case, we would use the vectors  $\vec{OA}$ ,  $\vec{OB}$ , and  $\vec{OC}$ , in which case the determinant would be

$$\begin{aligned} \begin{vmatrix} 1 & 1 & 1 \\ 2 & 4 & 3 \\ 3 & 4 & 5 \end{vmatrix} &= (20 - 12) - (10 - 9) + (8 - 12) \\ &= 3^*, \text{ which is the required volume} \end{aligned}$$

---

\*It is possible that the determinant could turn out to be negative, in which case we use the absolute value. This is because the determinant names  $\vec{OA} \cdot (\vec{OB} \times \vec{OC})$  while the volume we seek is  $|\vec{OA} \cdot (\vec{OB} \times \vec{OC})|$ .



MIT OpenCourseWare  
<http://ocw.mit.edu>

**Resource: Calculus Revisited: Multivariable Calculus**  
Prof. Herbert Gross

The following may not correspond to a particular course on MIT OpenCourseWare, but has been provided by the author as an individual learning resource.

For information about citing these materials or our Terms of Use, visit: <http://ocw.mit.edu/terms>.